


1. Lucy has 12 sweets and gives 5 sweets away to James. How many sweets does she have left?




2. Anna buys a banana for 21p and an apple for 7p. How much does she spend all together?



3. Gary is 14, his sister Jane is 6 years younger. How old is Jane?



4. Chocolate bars used to cost 26p. The cost has been cut by 5p. How much does chocolate now cost?



5. Joshua has 23p. After he buys a comic he has 12p left. How much was the comic?



6. Cathy has 17p, and Sally has 5p less. How much does Sally have?



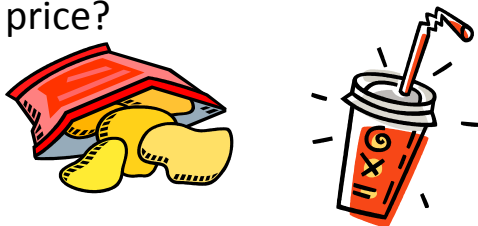
7. There are 28 people on the bus. At the next stop, 6 people get off. How many people are left on the bus?



8. Tanya had a ribbon that was 17cm long. She cut off 4cm. How long is her ribbon?



9. Crisps cost 20p and drinks cost 15p. What is the difference in price?



10. Polly has 6p less than Gary, who has 18p. How much does Polly have?

